

Name: _____

Morning Math

Write the date. _____


Determine the missing numbers.

$$56 + 28 = \square$$

$$44 + 48 = \square$$

$$\square = 40 - 36$$

Color in two different ways to show the amount.



Write < , > or = in the jar to compare.

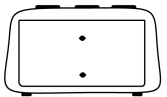

245  332

303  330

372  327

457  457

Show the time.



It is two forty.

Solve the problem.

Matt used a \$50 bill for some groceries at the store. If he received \$16 in change, how much were his groceries?